



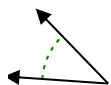
Determine if the angle shown is acute, obtuse, right or straight.

Answers

Ex)



1)



2)

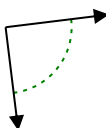


Ex. **acute**

1. _____

2. _____

3)



4)



5)



3. _____

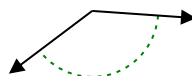
4. _____

5. _____

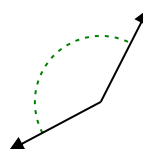
6)



7)



8)

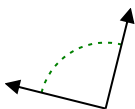


6. _____

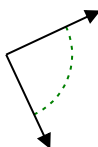
7. _____

8. _____

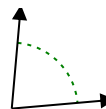
9)



10)



11)

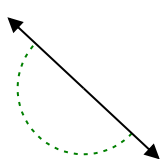


9. _____

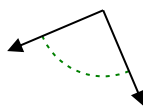
10. _____

11. _____

12)



13)



14)

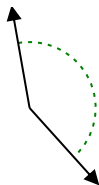


12. _____

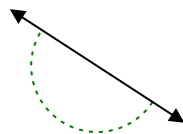
13. _____

14. _____

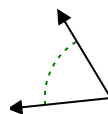
15)



16)



17)

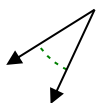


15. _____

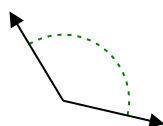
16. _____

17. _____

18)



19)



20)



18. _____

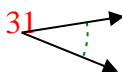
19. _____

20. _____

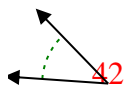


Determine if the angle shown is acute, obtuse, right or straight.

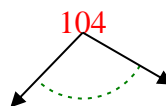
Ex)



1)



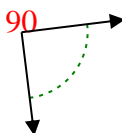
2)



Answers

Ex. acute

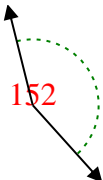
3)



4)



5)



1. acute

2. obtuse

3. right

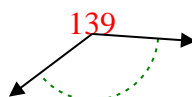
4. acute

5. obtuse

6)



7)



8)

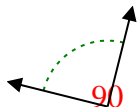


6. acute

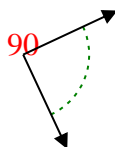
7. obtuse

8. obtuse

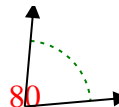
9)



10)



11)

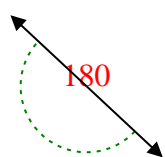


9. right

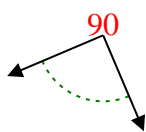
10. right

11. acute

12)



13)



14)



12. straight

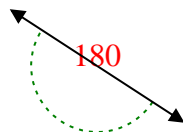
13. right

14. obtuse

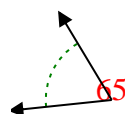
15)



16)



17)

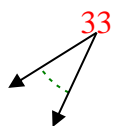


15. obtuse

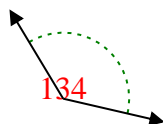
16. straight

17. acute

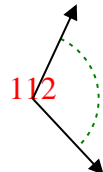
18)



19)



20)



18. acute

19. obtuse

20. obtuse



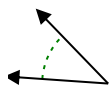
Determine if the angle shown is acute, obtuse, right or straight.

Answers

Ex)



1)



2)

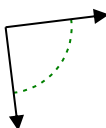


Ex. **acute**

1. _____

2. _____

3)



4)



5)



3. _____

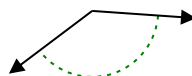
4. _____

5. _____

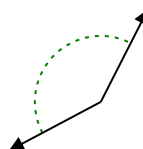
6)



7)



8)

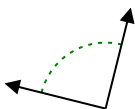


6. _____

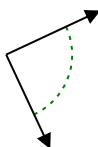
7. _____

8. _____

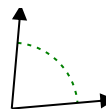
9)



10)



11)

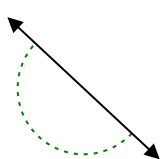


9. _____

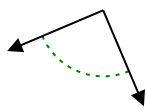
10. _____

11. _____

12)



13)



14)

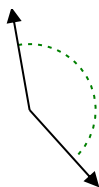


12. _____

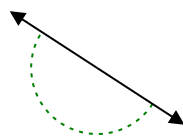
13. _____

14. _____

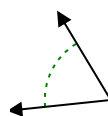
15)



16)



17)

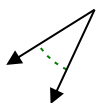


15. _____

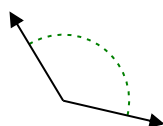
16. _____

17. _____

18)



19)



20)



18. _____

19. _____

20. _____